

# Lesson 1A HW

Name: \_\_\_\_\_

Date: \_\_\_\_\_

Math: \_\_\_\_\_

Decimal Computation Unit: Reading/Writing Decimals **HOMEWORK**  
(Reference page 799 in your book or your notes for help)

1. Fill in the place value chart. Use it for the remaining problems.

\_\_\_\_\_ , \_\_\_\_\_ , \_\_\_\_\_ . \_\_\_\_\_

2. Write a decimal for the given words.

a. Forty-one ten-thousandths

b. eighteen and five hundred four thousandths

c. seven and sixty-three hundredths

d. sixty-five and two hundred one thousandths

3. Write each decimal in words.

a. 0.06

\_\_\_\_\_  
\_\_\_\_\_  
\_\_\_\_\_

b. 4.705

\_\_\_\_\_  
\_\_\_\_\_  
\_\_\_\_\_

c. 145.012

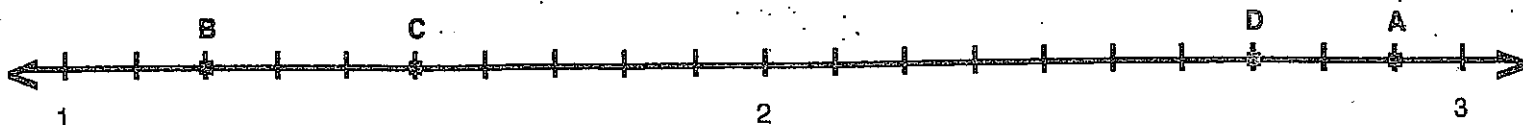
\_\_\_\_\_  
\_\_\_\_\_  
\_\_\_\_\_

d. 6.020

\_\_\_\_\_  
\_\_\_\_\_  
\_\_\_\_\_

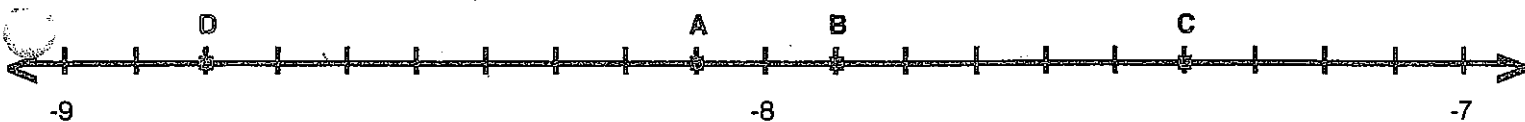
DIRECTIONS For each point, identify the decimal and write it using words.

4.



A = \_\_\_\_\_ B = \_\_\_\_\_ C = \_\_\_\_\_ D = \_\_\_\_\_

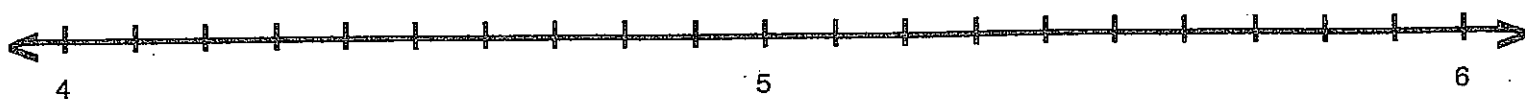
5.



A = \_\_\_\_\_ B = \_\_\_\_\_ C = \_\_\_\_\_ D = \_\_\_\_\_

Now, place each letter on the correct point.

6.



A = 4.3 B = 5.1 C = 4.8 D = 4.5